



CANDIDATE
NAME

--

CENTRE
NUMBER

--	--	--	--	--

CANDIDATE
NUMBER

--	--	--	--

0973/42

May/June 2023

2 hours

No additional materials are needed.

- Answer **all** questions.
- Use a black or dark blue pen. You may use an HB pencil for any diagrams or graphs.
- Write your name, centre number and candidate number in the boxes at the top of the page.
- Write your answer to each question in the space provided.
- Do **not** use an erasable pen or correction fluid.
- Do **not** write on any bar codes.
- You may use a calculator.
- You should show all your working and use appropriate units.

- The total mark for this paper is 120.
- The number of marks for each question or part question is shown in brackets [].
- The Periodic Table is printed in the question paper.

This document has **32** pages. Any blank pages are indicated.

- 1 (a) Fig. 1.1 is a diagram of parts of the eye.

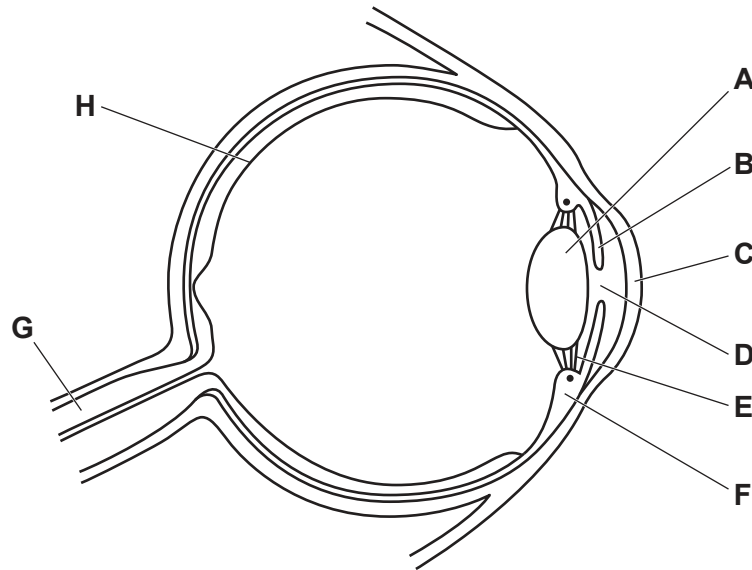


Fig. 1.1

- (i) State the letter in Fig. 1.1 which identifies the part that contains:
- circular and radial muscles
- receptor cells
- neurones.
- [3]
- (ii) Draw an **X** on Fig. 1.1 to identify the position of the blind spot. [1]
- (iii) Describe the changes to the parts labelled **A**, **E** and **F** when someone changes their focus from a near object to a distant object.
- A**
- E**
- F**
- [3]
- (iv) State the name of the hormone that causes part **D** in Fig. 1.1 to widen in response to a 'fight or flight' situation.
- [1]

- (b) Accommodation of the eye is an example of sensitivity.

Complete the sentence to describe the term sensitivity.

Sensitivity is the ability to detect or sense ,
which are changes in the internal or external
and to make appropriate responses.

[2]

[Total: 10]

2 Alkanes are **saturated hydrocarbons**.

(a) State what is meant by the term saturated hydrocarbon.

.....

.....

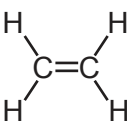
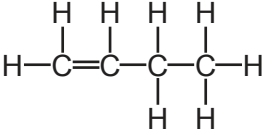
..... [2]

(b) **Alkenes** are also hydrocarbons.

Table 2.1 shows information about three alkenes.

Complete Table 2.1.

Table 2.1

name	molecular formula	structure
.....	C_2H_4	
propene	C_3H_6
.....	C_4H_8	

[3]

(c) Propane and propene are both colourless gases.

Describe a test to show which gas is propane and which gas is propene.

test

result with propane

.....

result with propene

.....

[3]

(d) The monomer C_4H_8 in Fig. 2.1 can be used to make a polymer.

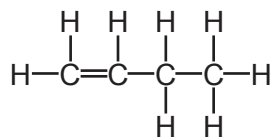


Fig. 2.1

Complete Fig. 2.2 to show the structure of the polymer made.

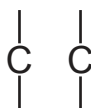


Fig. 2.2

[2]

[Total: 10]

- 3 Fig. 3.1 shows an insect called a pond skater.

Pond skaters spread their weight over their 6 legs so that they can move over the surface of water.

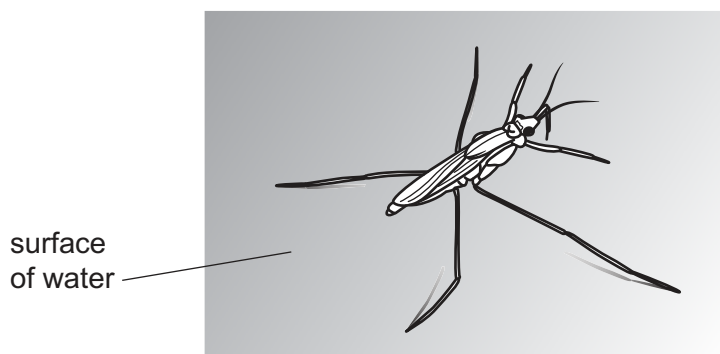


Fig. 3.1

- (a) The pond skater has a mass of 0.25g and is stationary on the surface of the water.

- (i) Use the values in the list to complete the sentences about the pond skater.

The gravitational field strength, g , is 10 N/kg.

You can use each value once, more than once or not at all.

0 N 0.0025 kg 0.0025 N 0.25 g 0.25 kg 2.5 N

The weight of the pond skater is

The force acting upwards on the pond skater by the water is

The resultant force acting on the pond skater is

[2]

- (ii) The pond skater stands on all 6 legs, with the foot of each leg making contact with the surface of the water.

The area of each foot is $1.2 \times 10^{-7} \text{ m}^2$.

Calculate the pressure exerted by each foot on the surface of the water.

pressure = Pa [2]

- (b) The pond skater moves across the surface of a pond.

Fig. 3.2 shows a speed–time graph for part of the pond skater’s journey.

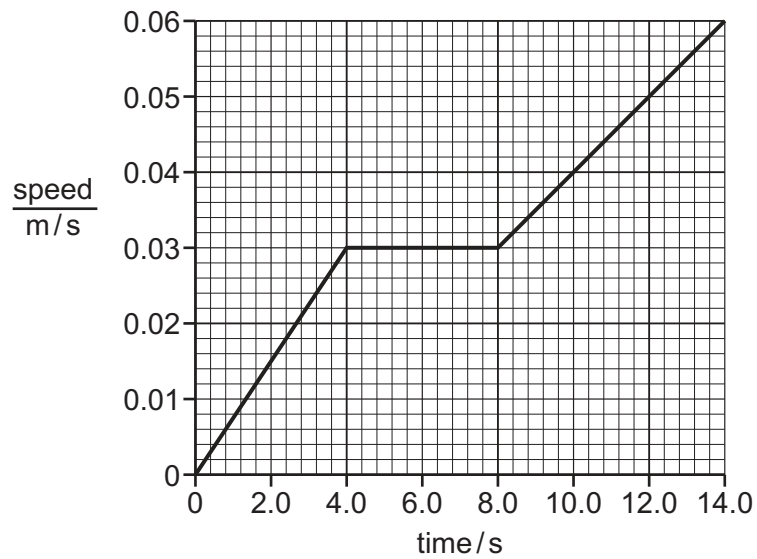


Fig. 3.2

- (i) Place an **X** on Fig. 3.2 to show a time at which the pond skater is travelling at a constant speed. [1]
- (ii) Use Fig. 3.2 to calculate the maximum acceleration of the pond skater.

acceleration = m/s^2 [2]

- (c) The movement of the pond skater on the surface of the water produces waves.

Fig. 3.3 shows a diagram of a wave produced by the pond skater.

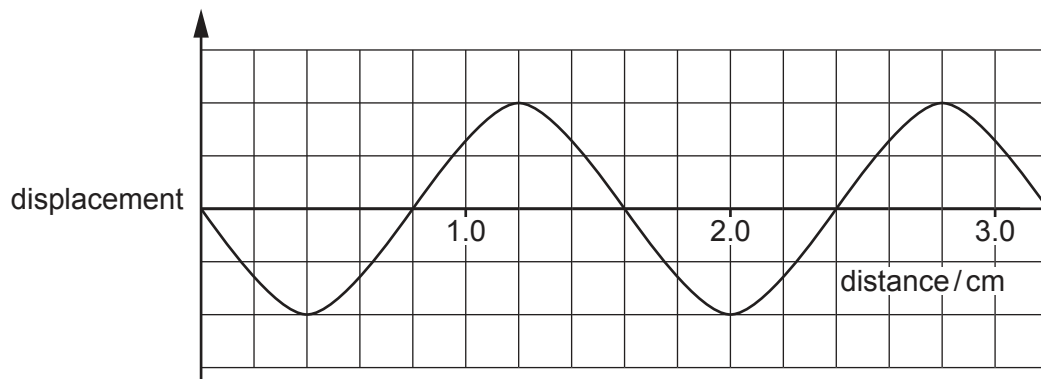


Fig. 3.3

- (i) Use Fig. 3.3 to determine the wavelength of the water wave in m.

wavelength = m [2]

- (ii) An observer sees 10 full waves pass a point in 5 seconds.

Use your answer to (c)(i) to calculate the speed of the wave.

speed = m/s [3]

[Total: 12]

BLANK PAGE

- 4 (a) Photosynthesis is an enzyme-controlled reaction.

Fig. 4.1 is a graph showing the effect of temperature on the rate of photosynthesis.

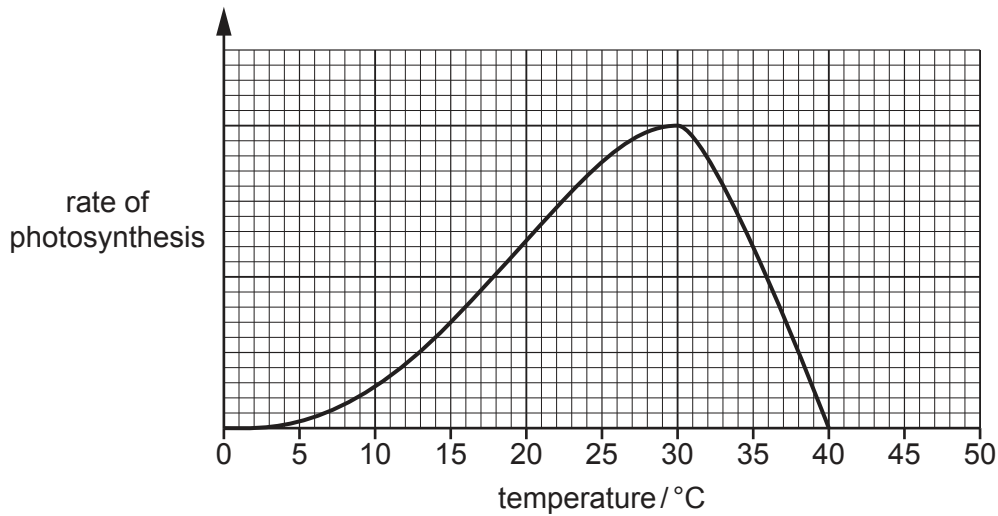


Fig. 4.1

- (i) Explain the results between 0–30 °C in Fig. 4.1.

.....

.....

.....

.....

..... [2]

- (ii) Explain the result at 40 °C in Fig. 4.1.

.....

.....

.....

.....

.....

.....

..... [3]

- (b) State the name of the substance that converts light energy to chemical energy during photosynthesis.

..... [1]

(c) State the names of the two raw materials used in photosynthesis.

1

2 [2]

(d) Describe two ways the cells in the palisade mesophyll layer are adapted for photosynthesis.

1

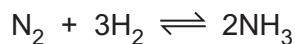
.....

2

..... [2]

[Total: 10]

- 5 Ammonia is made from the reaction of nitrogen and hydrogen in the Haber process.



- (a) State the sources of the nitrogen and hydrogen used in the Haber process.

nitrogen

hydrogen

[2]

- (b) Fig. 5.1 shows the energy level diagram for the reaction between nitrogen and hydrogen.

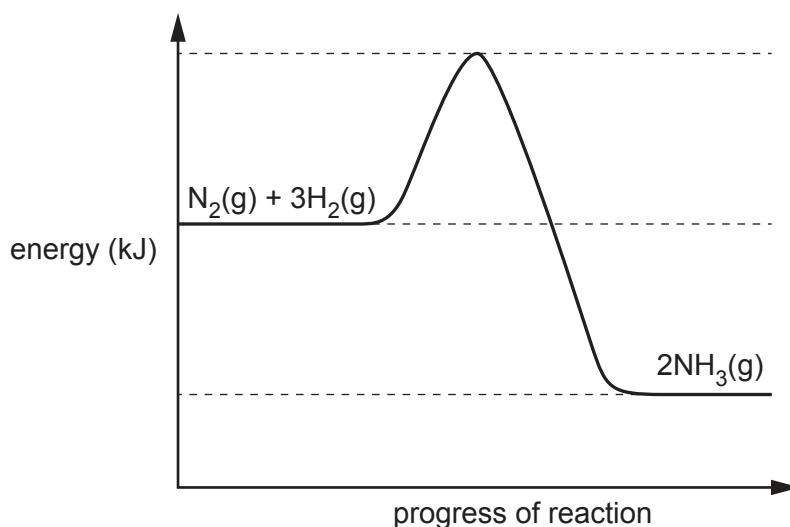


Fig. 5.1

- (i) Draw an arrow on Fig. 5.1 to show the energy change in the reaction.

Label your arrow **A**.

[1]

- (ii) Draw an arrow on Fig. 5.1 to show the activation energy of the reaction.

Label your arrow **B**.

[1]

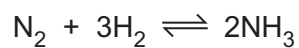
- (iii) Explain if Fig. 5.1 represents an exothermic or endothermic reaction.

Use ideas about bond breaking and bond making in your answer.

.....

[4]

- (c) 58.8 kg of nitrogen gas reacts with hydrogen gas to make 142.8 kg of ammonia gas.



Calculate the volume occupied by 142.8 kg of ammonia gas.

The volume of one mole of any gas is 24 dm^3 at room temperature and pressure (r.t.p.).

volume of ammonia gas = dm^3 [3]

[Total: 11]

- 6 (a) Fig. 6.1 shows the average power output over a summer's day from a solar panel made from solar cells.

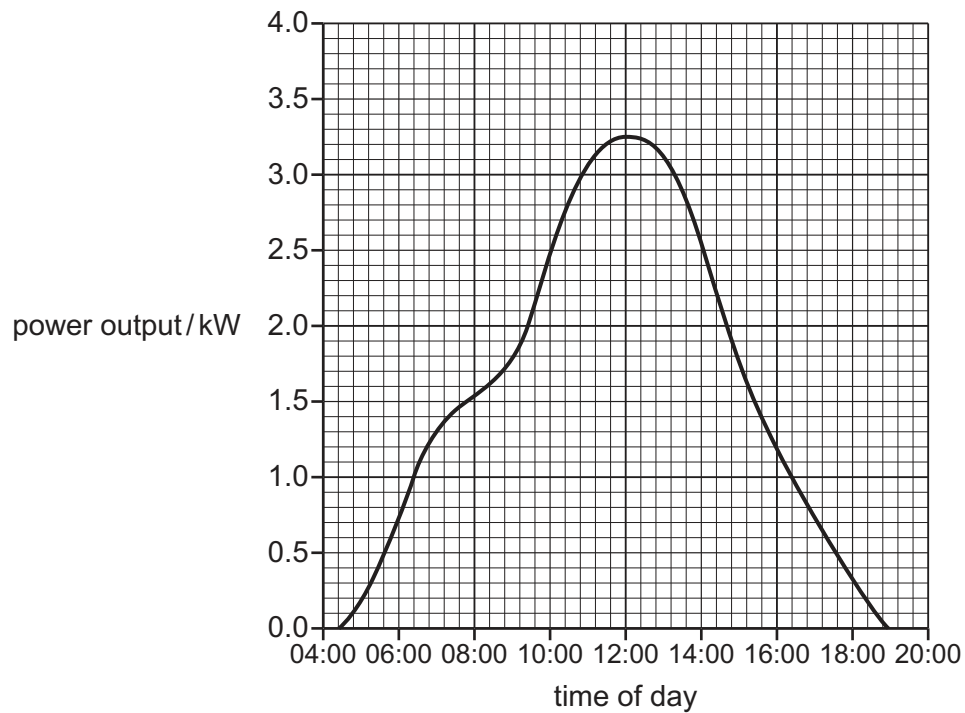


Fig. 6.1

- (i) State the time at which the power output of the solar panel is at its maximum.

time of day [1]

- (ii) Suggest **one** reason why the power output of the solar panel is at a maximum at this time.

.....

..... [1]

(b) Table 6.1 gives some data about different types of power stations.

Table 6.1

power station	fuel	efficiency /%	output voltage /kV	output power /MW
P	coal	30	22	1500
Q	natural gas	40	31	1000
R	uranium	30	23	1300

Use Table 6.1 to complete each sentence.

Each letter, **P**, **Q** or **R**, can be used once, more than once or not at all.

The power station that produces the least carbon dioxide is power station

The power station that releases the most energy per second is power station

The power station with the generator that produces the largest current is power station

[2]

- (c) Power stations use transformers to increase the output voltage.

Fig. 6.2 shows a simple transformer.

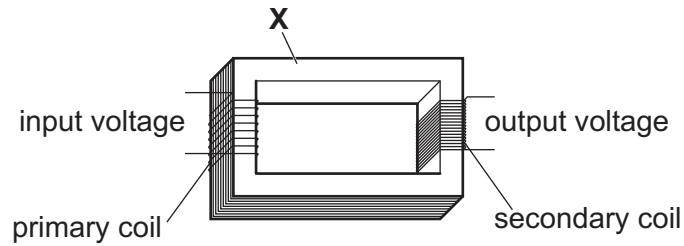


Fig. 6.2

- (i) State the name of the part of the transformer labelled **X**.

..... [1]

- (ii) Describe how the output voltage across the secondary coil is produced.

.....

 [3]

- (iii) Fig. 6.2 shows a step-up transformer containing 8 turns in the primary coil and 17 turns in the secondary coil.

The input voltage across the primary coil is 22 kV.

Calculate the output voltage across the secondary coil.

output voltage = kV [2]

[Total: 10]

BLANK PAGE

7 (a) Fig. 7.1 shows a food web.

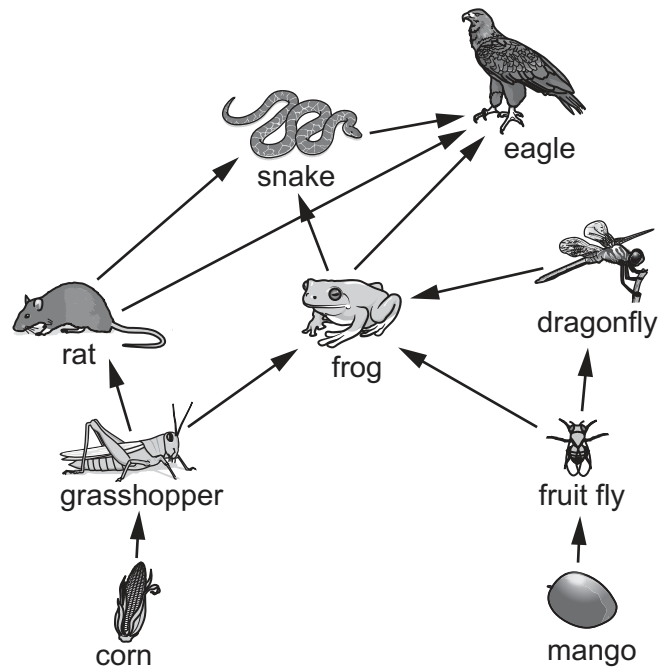


Fig. 7.1

(i) Use the information in Fig. 7.1 to state the name of one:

herbivore

.....

quaternary consumer

.....

organism that occupies the first trophic level.

.....

[3]

(ii) State three ways that energy is lost between trophic levels.

1

2

3

[3]

(iii) State the principal source of energy for all biological systems.

.....

[1]

- (b) Fertilisers are sometimes used to improve the growth of crop plants.

Excessive use of fertilisers pollutes rivers.

- (i) Explain why this pollution increases the growth of producers in rivers.

.....

.....

.....

.....

.....

..... [2]

- (ii) Explain how death of producers in rivers reduces the oxygen concentration in the water.

.....

.....

.....

.....

.....

..... [2]

[Total: 11]

- 8 (a) Copper has two isotopes, copper-63 and copper-65.

Table 8.1 shows information about copper-63 and copper-65.

Complete Table 8.1.

Table 8.1

isotope	proton (atomic) number	nucleon (mass) number	protons	neutrons	electrons
copper-63	29	63	29	34
copper-65	29	65	29

[3]

- (b) Complete the sentence to describe what is meant by isotopes.

Choose words from the list.

compound
electron
element
group
nucleon
nucleus
proton

Isotopes are atoms of the same which have the same number but a different number.

[3]

- (c) An element is in Group II and Period 3 of the Periodic Table.

Predict the electronic structure of this element.

Tick (✓) **one** box.

- 2.3 ☐
- 2.2.3 ☐
- 2.8.2 ☐
- 2.8.3 ☐

[1]

- (d) Complete Fig. 8.1 to show the covalent bonding in a molecule of nitrogen, N_2 .

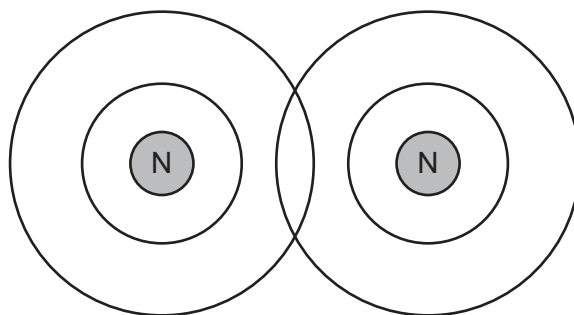


Fig. 8.1

[2]

- (e) The element nitrogen is **covalently** bonded.

The melting point of nitrogen is -210°C .

Calcium nitride, Ca_3N_2 , is an **ionic** compound.

The melting point of calcium nitride is 1195°C .

Explain the difference in melting points in terms of attractive forces.

.....

.....

..... [2]

[Total: 11]

9 A student investigates series and parallel circuits using filament lamps.

(a) Fig. 9.1 shows the first circuit the student makes using three identical filament lamps.

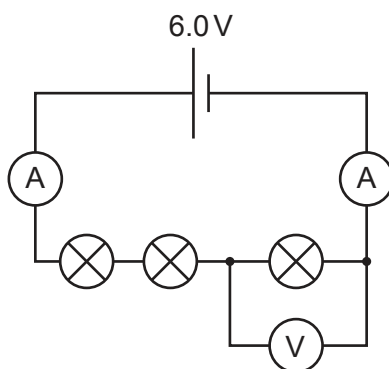


Fig. 9.1

(i) Determine the potential difference shown on the voltmeter.

potential difference = V [1]

(ii) Explain why the reading on both ammeters is the same.

.....
 [1]

(b) Fig. 9.2 shows the second circuit made by the student using the same three identical filament lamps.

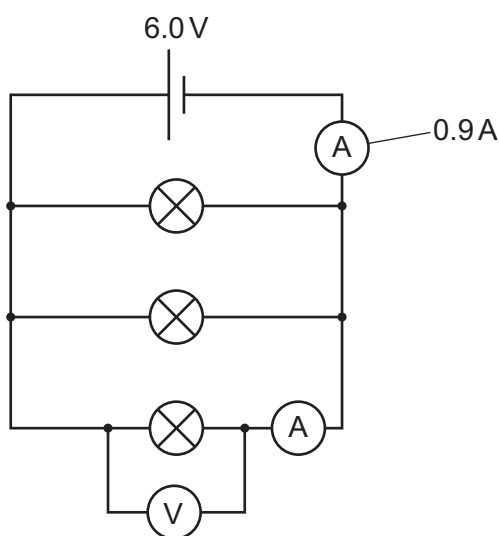


Fig. 9.2

One of the ammeters shows a current of 0.9A as shown in Fig. 9.2.

The voltmeter shows a potential difference of 6.0V.

Calculate the resistance of one of the filament lamps.

resistance = Ω [3]

- (c) The filament lamps emit energy in the form of infrared radiation and visible light.

Complete the sentences to compare infrared radiation with visible light.

Infrared radiation and visible light are both parts of the

The wavelength of infrared radiation is than the wavelength of visible light.

The frequency of infrared radiation is than the frequency of visible light.

The speed of infrared radiation and visible light is [2]

[Total: 7]

10 (a) Fig. 10.1 is a diagram of a sperm cell in humans.

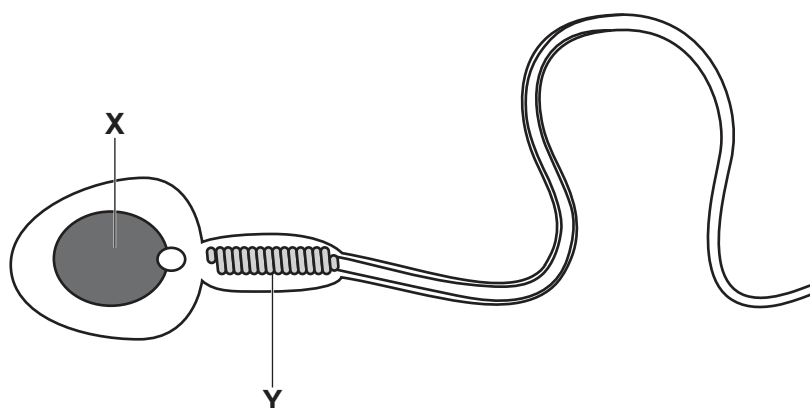


Fig. 10.1

- (i) Cell structure **X** contains unpaired chromosomes.

State the **two** words used to describe cell structure **X** in Fig. 10.1.

..... [2]

- (ii) State the number of chromosomes in cell structure **X** in Fig. 10.1.

..... [1]

- (iii) Mitochondria are the site of aerobic respiration.

Suggest why part **Y** in Fig. 10.1 contains many mitochondria.

.....

.....

.....

.....

..... [2]

- (b) Table 10.1 compares some of the features of asexual reproduction and sexual reproduction.

Place ticks (✓) in the boxes in Table 10.1 to show the correct features of asexual reproduction and sexual reproduction.

Table 10.1

	asexual reproduction	sexual reproduction
involves formation of a zygote		
no genetic variation		
involves production of offspring		

[2]

- (c) Describe two **disadvantages** of sexual reproduction.

1

.....

2

.....

[2]

[Total: 9]

- 11** Electrolysis is the breakdown of an ionic compound, when molten or in aqueous solution, by the passage of electricity.

The products of electrolysis of some aqueous solutions, using inert electrodes, are shown in Table 11.1.

Table 11.1

aqueous solution	product at anode	product at cathode
copper chloride	copper
magnesium sulfate	oxygen
sodium bromide	bromine	hydrogen

- (a)** Part of the reactivity series, from most reactive to least reactive, is shown.

sodium
magnesium
(hydrogen)
copper

Use this information to complete Table 11.1. [2]

- (b)** State why hydrogen forms at the cathode, rather than sodium, during the electrolysis of aqueous sodium bromide.

.....
..... [1]

- (c)** Copper is formed at the cathode in the electrolysis of aqueous copper chloride.

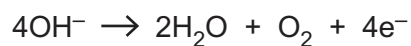
Construct the ionic half-equation for the formation of copper at the cathode.

..... [2]

(d) Aqueous copper(II) sulfate is electrolysed using inert electrodes.

Oxygen gas is formed at the anode. Copper metal is formed at the cathode.

(i) The ionic half-equation for the formation of oxygen gas at the anode is shown.



State if this reaction is oxidation or reduction.

Explain your answer using ideas about electrons.

.....

..... [1]

(ii) The experiment is repeated using **copper electrodes** instead of inert electrodes.

Describe what happens at the anode and the cathode using copper electrodes.

anode

cathode

[2]

[Total: 8]

12 (a) Table 12.1 shows information about three types of ionising radiation.

Table 12.1

type of ionising radiation	nature of radiation	relative ionising effect	relative penetrating ability
alpha	high
beta	fast-moving electron	medium	medium
gamma	electromagnetic radiation	low

(i) Complete Table 12.1. [2]

(ii) Fig. 12.1 shows the path taken by a beta particle as it moves through an electric field.

Complete Fig. 12.1 to show the paths taken by alpha particles and gamma rays as they pass through an electric field.

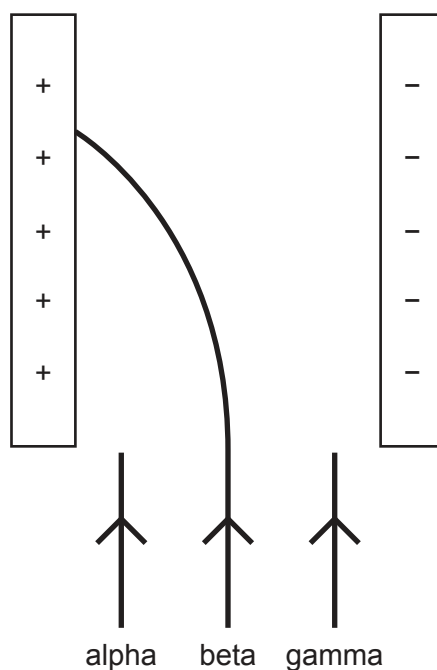


Fig. 12.1

[2]

- (b) Beta particles are released when carbon-14 ($^{14}_6\text{C}$) decays into an isotope of nitrogen.

Use the correct nuclide notation to complete the decay equation for carbon-14.



[2]

- (c) At room temperature, nitrogen is a gas, water is a liquid and carbon is a solid.

- (i) Explain why a gas can be compressed and a solid cannot be compressed.

.....

 [1]

- (ii) Suggest if water can be compressed.

Give a reason for your answer.

.....

 [1]

- (iii) A sample of nitrogen gas is held in a container with a fixed volume.

The temperature of the nitrogen is increased.

Explain the effect that increasing the temperature of the gas has on the pressure in the gas.

Use ideas about molecules in your answer.

.....

 [3]

[Total: 11]

BLANK PAGE

Permission to reproduce items where third-party owned material protected by copyright is included has been sought and cleared where possible. Every reasonable effort has been made by the publisher (UCLES) to trace copyright holders, but if any items requiring clearance have unwittingly been included, the publisher will be pleased to make amends at the earliest possible opportunity.

To avoid the issue of disclosure of answer-related information to candidates, all copyright acknowledgements are reproduced online in the Cambridge Assessment International Education Copyright Acknowledgements Booklet. This is produced for each series of examinations and is freely available to download at www.cambridgeinternational.org after the live examination series.

Cambridge Assessment International Education is part of Cambridge Assessment. Cambridge Assessment is the brand name of the University of Cambridge Local Examinations Syndicate (UCLES), which is a department of the University of Cambridge.

© UCLES 2023

The volume of one mole of any gas is 24 dm^3 at room temperature and pressure (r.t.p.):